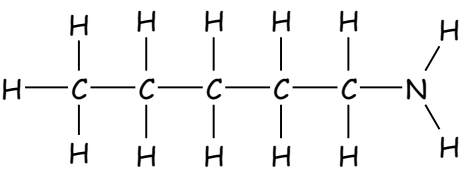
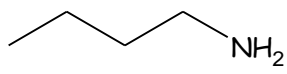
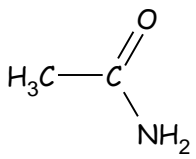
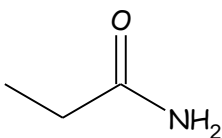
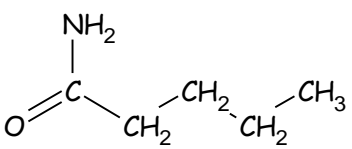
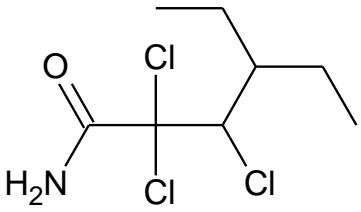
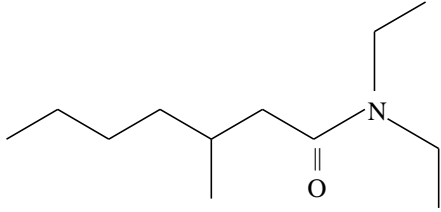


Amines and Amides wk 14

Fill in the missing structural diagram or name.

| | |
|---|---|
|  | <p>2-hexanamine</p> |
| <p>4-nonanamine</p> |  |
|  | <p>methanamide</p> |
| <p>hexanamide</p> |  |
|  | <p>cyclopentanone</p> |
| <p>2-methyl-1-pentanamine</p> | <p>N-ethyloctanamide</p> |

Amines and Amides wk 14

| | |
|---|---|
|  | $\begin{array}{c} & & \\ -\text{C} & - & \text{C} & - & \text{C} & - & \text{NH}_2 \\ & & \end{array}$ |
| <p>3-chloro-4-methylpentanamide</p> | $\begin{array}{c} & & & & \text{O} \\ -\text{C} & - & \text{C} & - & \text{C} & - & \text{C} & - & \text{NH}_2 \\ & & & & \end{array}$ |
|  | $\begin{array}{c} \text{CH}_2\text{-CH}_3 \\ \\ \text{CH}_3\text{-CH}_2\text{-CH} \\ \\ \text{NH}_2 \end{array}$ |
| $\begin{array}{c} \text{CH}_3\text{-CH}_2\text{-CH-CH}_3 \\ \\ \text{NH}_2 \end{array}$ | $\begin{array}{c} \text{O} \\ \\ \text{CH}_3\text{-NH-C-CH}_2\text{CH}_2\text{CH}_2\text{CH}_2\text{CH}_3 \end{array}$ |
| $\begin{array}{c} \text{CH}_3\text{-CH}_2\text{-CH-NH}_2 \\ \\ \text{CH}_3 \end{array}$ | <p>2,2,3-trifluoro-2-butanamine</p> |