
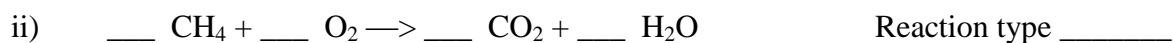


Science 1206 Chemistry

Worksheet #14 Balancing Chemical Equations and Identifying Reaction Type

1. Balance each of the following equations and identify the type of reaction.



2. Classify, write the product(s) and balance each of the following reactions.

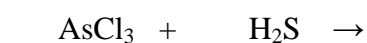
a) Reaction Type: _____



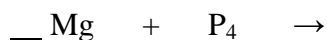
b) Reaction Type: _____



c) Reaction Type: _____



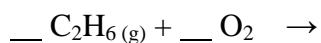
d) Reaction Type: _____



e) Reaction Type: _____



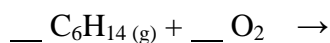
f) Reaction Type: _____



g) Reaction Type: _____



h) Reaction Type: _____



i) Reaction Type: _____



j) Reaction Type: _____

